

# Year 1 Maths Activity Mat

2

## Section 1

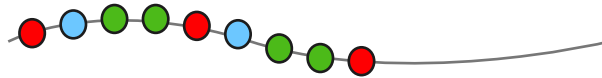
Draw 4 more flowers. Fill in the boxes to show how many flowers there are altogether.



$$\square + \square = \square$$

## Section 2

Draw and colour the next 3 beads in the pattern.



## Section 3


What day was it **yesterday**? Circle the correct day.



Thursday    Friday    Saturday    Sunday

## Section 4

How many feet are there on 3 penguins?



## Section 5

How many of each shape are there?



triangular prism =     cube =

## Section 6

Match up the words which describe the jugs.



full




empty



half full


## Section 7

Draw the hands on the clock to show half past 2.



## Section 8

Draw the coins that I need to buy the toy.



# Year 1 Maths Activity Mat: 2

## Answers

### Section 1

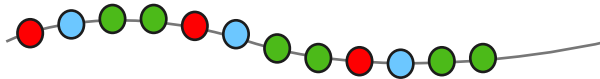
Draw 4 more flowers. Fill in the boxes to show how many flowers there are altogether.



$$\boxed{6} + \boxed{4} = \boxed{10}$$

### Section 2

Draw and colour the next 3 beads in the pattern.



### Section 3


What day was it yesterday? Circle the correct day.



Thursday Friday Saturday Sunday

### Section 4

How many feet are there on 3 penguins?



6

### Section 5

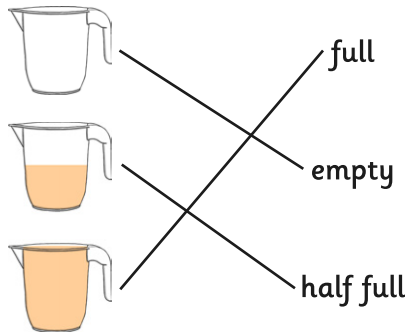
How many of each shape are there?



triangular prism =  cube =


### Section 6

Match up the words which describe the jugs.




### Section 7

Draw the hands on the clock to show half past 2.



### Section 8

Draw the coins that I need to buy the toy.



example:

