

Year 2 Maths Activity Mat

6

Section 1

Sophie made 6 sandcastles. Jenny made double that amount. How many sandcastles did Jenny make?



Section 2

If the letter **A** is 10 can you work out what the letter **B** is?

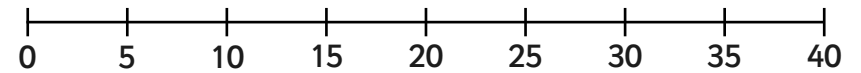
$$5 + A = B$$

$$B = \boxed{}$$

Section 3

Draw arrows on the number line where these numbers should be:

6 13 38



Section 4

Sophie scores 16 points on a computer game. Layla only scores 9. How many more points did Sophie score than Layla?



Section 5


How many ways can you make 28p with coins?

Section 6

16 birds are sitting on a roof. 10 more join them. Then 6 fly away. How many are on the roof now?

Section 7

Owen will go to bed in 1 hour. What time will this be?



Section 8

Put the correct sign in:

$$\begin{array}{r} \times \quad + \quad = \\ 5 \quad \boxed{} \quad 5 = 10 \end{array}$$

$$2 \quad \boxed{} \quad 4 = 8$$

$$10 \times 7 \quad \boxed{} \quad 70$$

Year 2 Maths Activity Mat: 6

Answers

Section 1

Sophie made 6 sandcastles. Jenny made double that amount. How many sandcastles did Jenny make?



12

Section 2

If the letter **A** is 10 can you work out what the letter **B** is?

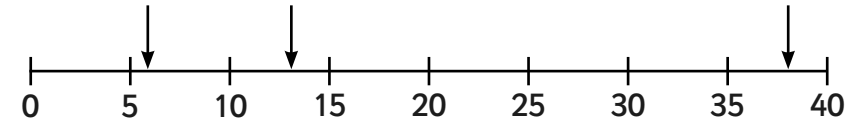
$$5 + A = B$$

$$B = 15$$

Section 3

Draw arrows on the number line where these numbers should be:

6 13 38



Section 4

Sophie scores 16 points on a computer game. Layla only scores 9. How many more points did Sophie score than Layla?



7

Section 5

How many ways can you make 28p with coins?

$$20p + 5p + 2p + 1p$$

Accept any answer making a total of 78p.


Section 6

16 birds are sitting on a roof. 10 more join them. Then 6 fly away. How many are on the roof now?

20

Section 7

Owen will go to bed in 1 hour. What time will this be?



9:00pm

Section 8

Put the correct sign in:

$$\begin{array}{l} \times \quad + \quad = \\ 5 \quad \boxed{+} \quad 5 = 10 \\ 2 \quad \boxed{\times} \quad 4 = 8 \\ 10 \times 7 \quad \boxed{=} \quad 70 \end{array}$$

Year 2 Maths Activity Mat

6

Section 1

Abi built 3 sandcastles. Rachel made five times as many sandcastles. How many did Rachel make?



Section 2

If **A** equals 6, what is **B**?

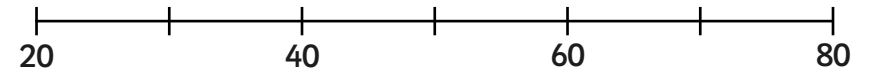
$$22 + A = B$$

$$B = \boxed{}$$

Section 3

Draw arrows on the number line where these numbers should be:

22 61 45 78



Section 4

Lewis scores 35 points on a computer game. Max scores 29. How many more points did Lewis score?



Section 5


How many ways can you make 78p with coins?

Section 6

12 birds are sitting on a roof. 8 fly away and 6 join the rest. How many birds are on the roof now?

Section 7

Owen will go to school in 20 minutes. What time will this be?



Section 8

Put the correct sign in:

\times	$+$	\div
8 $\boxed{}$ 2 = 4		
4 $\boxed{}$ 5 = 20		
23 $\boxed{}$ 5 = 28		

Year 2 Maths Activity Mat: 6

Answers

Section 1

Abi built 3 sandcastles. Rachel made five times as many sandcastles. How many did Rachel make?



15

Section 2

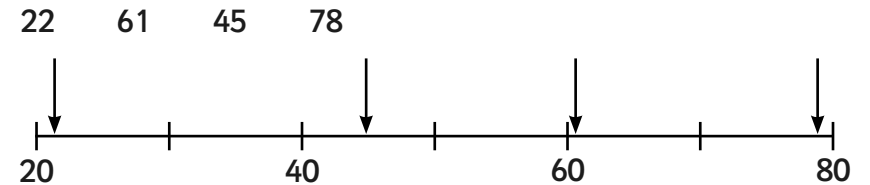
If **A** equals 6, what is **B**?

$$22 + A = B$$

$$B = 28$$

Section 3

Draw arrows on the number line where these numbers should be:



Section 4

Lewis scores 35 points on a computer game. Max scores 29. How many more points did Lewis score?



6

Section 5

How many ways can you make 78p with coins?

E.g.
 $50p + 20p + 5p + 2p + 1p$

Accept any answer making a total of 78p.


Section 6

12 birds are sitting on a roof. 8 fly away and 6 join the rest. How many birds are on the roof now?

10

Section 7

Owen will go to school in 20 minutes. What time will this be?



8:35am

Section 8

Put the correct sign in:

\times	$+$	\div
8	\div	2 = 4
4	\times	5 = 20
23	$+$	5 = 28

Section 1

Liam and Noah were building sandcastles. Altogether, there were 27. Noah could have built 20 and Liam could have built 7. Write down three more possibilities.

Section 2

If **A** equals 30, what is **B**?

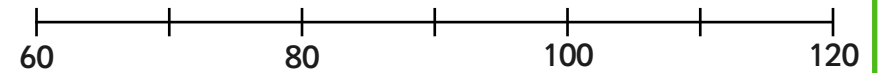
$$17 + A = B$$

$$B = \boxed{}$$

Section 3

Draw arrows on the number line where these numbers should be:

67 82 95 110



Section 4

Emma scores 135 points on a computer game. Logan scores 129. How many more points did Emma score than Logan? Write this as a number sentence.



Section 5


How many ways can you make £1.67 with coins?

Section 6

16 birds are sitting on a roof. Half of them fly away and 10 join the rest. How many birds are on the roof now?

Section 7

Owen is allowed to play for 35 minutes and then it is his bedtime. What time will he go to bed?



Section 8

Put the correct sign in:

$$\times \quad + \quad \div$$

9 5 = 45

33 4 = 37

100 10 = 10

Year 2 Maths Activity Mat: 6

Answers

Section 1

Liam and Noah were building sandcastles. Altogether, there were 27. Noah could have built 20 and Liam could have built 7. Write down three more possibilities.

Any 3 possibilities
e.g. $19 + 8$, $18 + 9$, $17 + 10$

Section 2

If **A** equals 30, what is **B**?

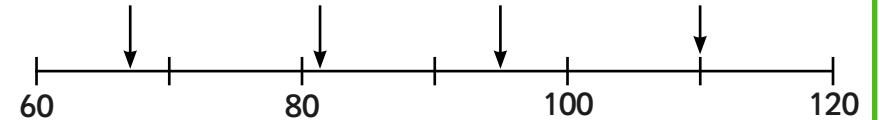
$$17 + A = B$$

$$B = 47$$

Section 3

Draw arrows on the number line where these numbers should be:

67 82 95 110



Section 4

Emma scores 135 points on a computer game. Logan scores 129. How many more points did Emma score than Logan? Write this as a number sentence.



$$6$$
$$135 - 129 = 6$$

Section 5

How many ways can you make £1.67 with coins?

$$£1 + 50p + 10p + 5p + 2p$$


Section 6

16 birds are sitting on a roof. Half of them fly away and 10 join the rest. How many birds are on the roof now?

18

Section 7

Owen is allowed to play for 35 minutes and then it is his bedtime. What time will he go to bed?



Section 8

Put the correct sign in:

$$\times \quad + \quad \div$$
$$9 \quad \boxed{\times} \quad 5 = 45$$

$$33 \quad \boxed{+} \quad 4 = 37$$

$$100 \quad \boxed{\div} \quad 10 = 10$$